

W E L C O M E









MAHARSHI PATANJALI VIDYA MANDIR

SESSION 2020-2021
HOLIDAY HOMEWORK
CLASS 1



SUBJECT- MATHS

- I. Fill in the blanks and draw the correct number of beads on each abacus :-

$18 = \underline{\hspace{1cm}} \text{ ten} + \underline{\hspace{1cm}} \text{ ones}$ $= \underline{\hspace{2cm}}$ $= \underline{\hspace{2cm}}$		$49 = \underline{\hspace{1cm}} \text{ tens} + \underline{\hspace{1cm}} \text{ ones}$ $= \underline{\hspace{2cm}}$ $= \underline{\hspace{2cm}}$	
$76 = \underline{\hspace{1cm}} \text{ tens} + \underline{\hspace{1cm}} \text{ ones}$ $= \underline{\hspace{2cm}}$ $= \underline{\hspace{2cm}}$		$45 = \underline{\hspace{1cm}} \text{ tens} + \underline{\hspace{1cm}} \text{ ones}$ $= \underline{\hspace{2cm}}$ $= \underline{\hspace{2cm}}$	
$67 = \underline{\hspace{1cm}} \text{ tens} + \underline{\hspace{1cm}} \text{ ones}$ $= \underline{\hspace{2cm}}$ $= \underline{\hspace{2cm}}$		$79 = \underline{\hspace{1cm}} \text{ tens} + \underline{\hspace{1cm}} \text{ ones}$ $= \underline{\hspace{2cm}}$ $= \underline{\hspace{2cm}}$	

- II. Write the Number Names for the following :-

- a) 47 - _____
- b) 99 - _____
- c) 65 - _____
- d) 39 - _____

- III. Write the missing number by counting forward :-

- a) _____ , _____ , 21 , _____ , _____ , _____ , 25
- b) 27 , _____ , _____ , _____ , 31 , _____ , _____

c) _____ , _____ , _____ , 76 , _____ , _____ , 79

IV. Write the numbers just before and just after the given number:-

a) _____ 29 _____

d) _____ 77 _____

b) _____ 33 _____

e) _____ 89 _____

c) _____ 64 _____

f) _____ 40 _____

V. Add the following :-

a) T O

4 5

+ 2 7

b) T O

3 4

+ 2 7

c) T O

2 6

+ 3 5

VI. Fill in the blanks :-

a) $(2 + 3) + 1 = \underline{\hspace{1cm}} + \underline{\hspace{1cm}} = \underline{\hspace{1cm}}$

b) $(5 + 2) + 3 = \underline{\hspace{1cm}} + \underline{\hspace{1cm}} = \underline{\hspace{1cm}}$

c) $2 + (3 + 1) = 2 + \underline{\hspace{1cm}} = \underline{\hspace{1cm}}$

VII. Subtract :-

a) H T O

3 7 6

- 1 9 8

b) H T O

5 4 2

- 2 5 3

c) H T O

7 6 9

- 2 8 9

VIII. Write 'T' for True and 'F' for False :-

a) 450 is 45 tens ()

b) 100 less than 975 is 875 ()

c) Place Value of 6 in 569 is 6 tens ()


d) 8 tens more than 700 is 780 ()

e) The numeral for $400 + 5 + 0$ is 405 ()

IX. Count and write how many of each shape are there in the picture and colour the shapes as given-

**Rectangle- Yellow ; Circle- Navy Blue ; Triangle- Red ;
Square- Green**

SHAPE	RECTANGLE	CIRCLE	SQUARE	TRIANGLE
NUMBER				



x. Write the table of 2, 3, 4, 5 :-

Table of 2	Table of 3
Table of 4	Table of 5

--	--




SUBJECT – ENGLISH LANG & LITERATURE

1) Given below are few Naming Words. Arrange the names in the proper columns given below the words :-

banana	market	goat
lion	hotel	Ramu
train	sparrow	gardener
bench	tailor	school
book	zoo	doctor

<u>PERSON</u>	<u>PLACE</u>	<u>ANIMAL/BIRD</u>	<u>THING</u>

2) Look at these pictures :-



Write 4 sentences about each of the pictures given above with the help of the clues given below :-

- a) _____

- b) _____

- c) _____

- d) _____

CLUE BOX -

elephant , doctor , Taj Mahal , train

3) Fill in the blanks with the correct words :-

<u>ONE</u>	<u>MORE THAN ONE</u>
Glass	
Tomato	
Tree	
Man	
Hand	
Bus	
child	

4) Learn all the spellings from your spellings copy and write it in your 3-in-1 copy.

5) Learn and write the poems in your English Literature copies – ‘My Family’, ‘White Sheep’ , ‘Tea Time’ and ‘Two Nests’.

6) Make Sentences with the following words :-

a) Picnic -

b) Vegetable cart -

c) Kennel -

d) Mother -

SUBJECT – HINDI

1) Learn all the work done in hindi notebook 1 &2 both.

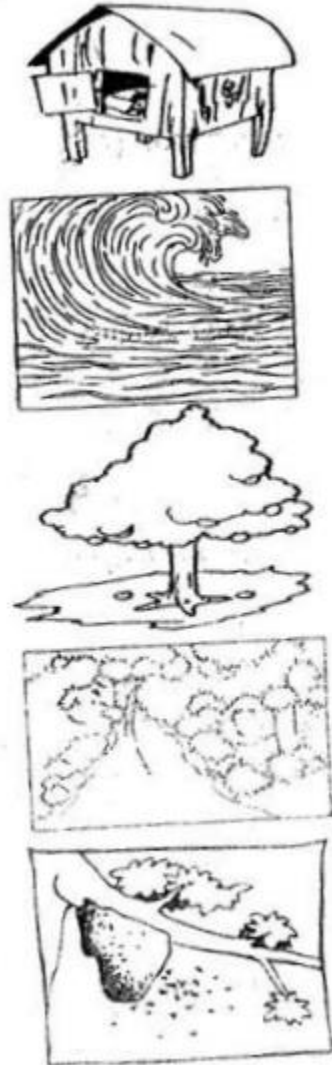

2) Write one page writing in 3 in 1 everyday.

3) Do the activity-I TOPIC-yataayatkesadhnokenaamlkhkar picture paste kro,help from hindi book pageno.15.(DO IN THE FILE PAPER)

4) Prepare unit 1 syllabus for exams.

SUBJECT – EVS

1) Match the animals with their homes and colour it :-



2) Write the names the following person and your relationship with them :-


a) Your mother or father's mother -

b) Your father's brother - _____

c) Your mother's sister - _____

d) Your brother/sister - _____

3) Draw and name the favourite area of your school :-



4) Fill in the blanks with the correct words :-

- a) A postman brings us _____
- b) The _____ is the head of the school.
- c) We wear our _____ to school.
- d) We keep our money and jewellery safe in a _____
- e) Republic Day is celebrated on _____

[illegible]

SUBJECT – COMPUTER

1) Write two examples for each of the following :-

- a) Machine that runs with electricity – _____
- b) Machine that runs on fuel - _____
- c) Machine that runs on human power - _____


(Children, you may also draw or paste pictures of these machines)

ACTIVITY TIME



Colour the following pictures :-





Thank You!

